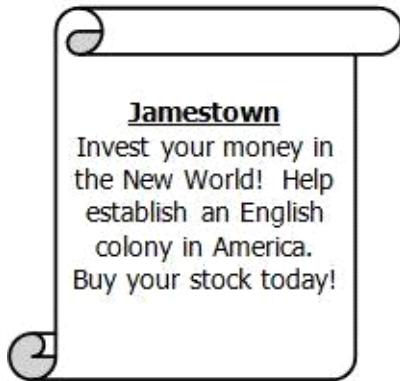


SAC-cbaumgardner 4th Gr Unit 05 Power Quiz
Exam not valid for Paper Pencil Test Sessions

1



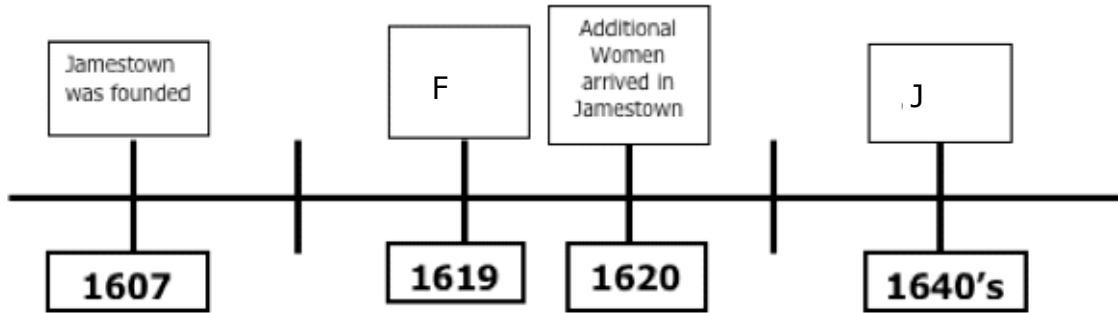
The advertisement was MOST LIKELY written by —

- A John Smith.
- B Christopher Newport.
- C The Virginia Company of London.
- D Powhatan Indians.

2

Drag and drop 2 of the 4 letters to the correct boxes.

Match the event to its correct year on the timeline.



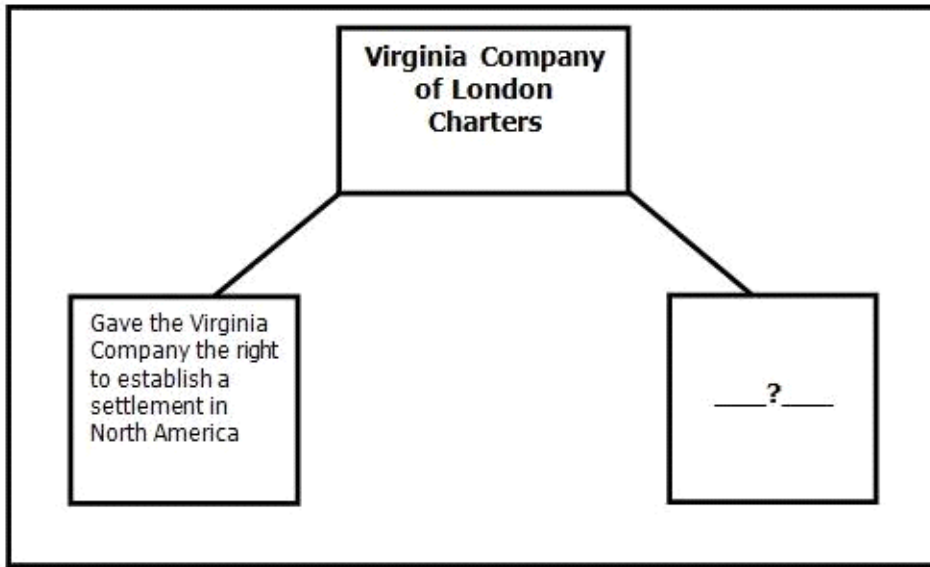
| | Event |
|--|---|
| | Governor called a meeting of the General Assembly |
| | The Continental Congress meets in Philadelphia |
| | The House of Delegates first meets in Richmond |
| | The burgesses became a separate legislative body, called the House of Burgesses |

3

Portuguese sailors captured African men and women from what is present-day —

- A Morocco
- B Ethiopia
- C Angola
- D Botswana

4



Which BEST completes the diagram?

- A Let settlers rule themselves
- B Defined the physical boundaries of the colony.
- C Allowed settlers to make their own laws
- D Gave settlers the right to worship as they pleased

5

Click on the 3 correct answers.

Which of the following are ways the native peoples contributed to the survival of Jamestown?

| | |
|---|---|
| Helped settlers find gold and silver | Showed the settlers how to plant corn and tobacco |
| Pocahontas served as a contact between the native peoples and the English | Powhatan taught the settlers survival skills |

6

Which group made it possible to expand the tobacco economy in Jamestown?

- A English
- B Women
- C Spanish
- D Africans

7

Who initiated trading relationships with the native peoples?

- A Captain John Smith
- B The King of England
- C Pocahontas
- D Christopher Newport

8 **The arrival of additional women at Jamestown made it possible for settlers to establish —**

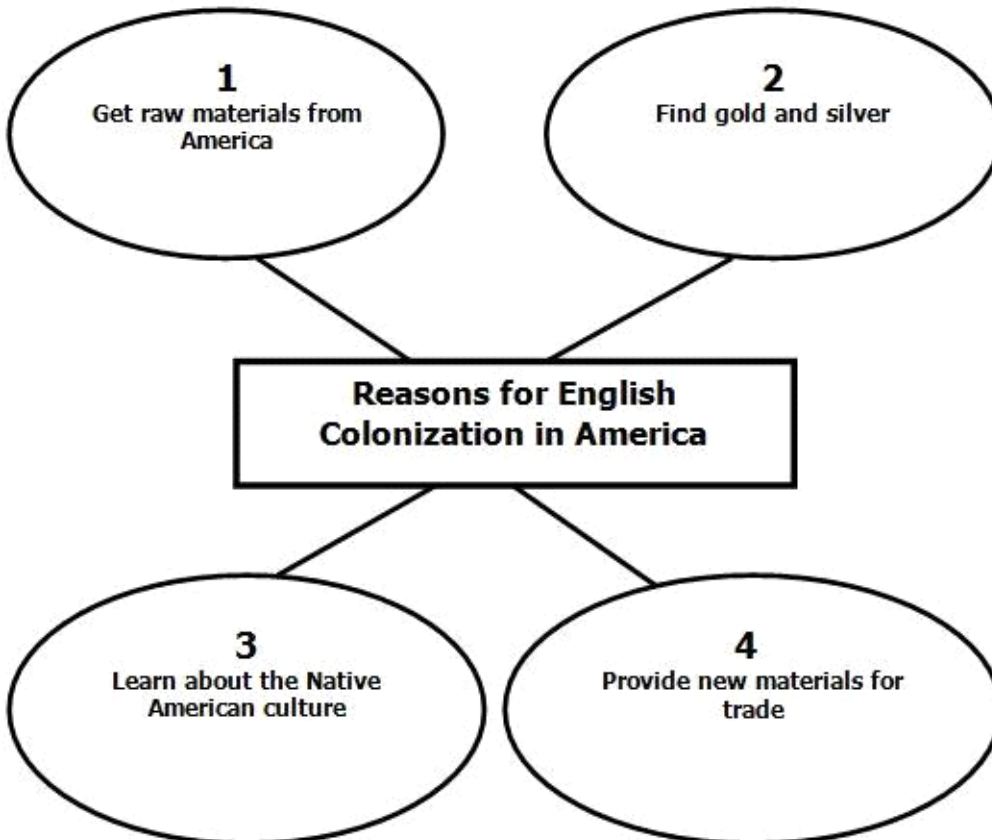
- A tobacco fields
- B families
- C relationships with native peoples
- D the General Assembly

9 Click on the 4 correct answers.

Which of the following were hardships faced by the settlers at Jamestown?

| | | |
|--|--|--|
| The lacked safe drinking water | The settlers lacked some of the skills necessary to provide for themselves | Lack of money |
| A drought at the time of the settlement reduced the amount of food available | Constant attacks from the French | Many settlers died of starvation and disease |

10



Which bubble does NOT belong on the diagram above?

- A 1
- B 2
- C 3
- D 4

- 11 **When the settlers arrived in 1607, they founded Jamestown on a narrow peninsula bordered on three sides by the —**
- A Chesapeake Bay.
 - B York River.
 - C James River.
 - D Potomac river.
- 12 **Over time, when the English settlements continued to grow, the native peoples came to see the settlers as —**
- A friends
 - B equal partners
 - C invaders
 - D tribal members